

Worksheet- 1

Grade – 1

Sub - English

Write all the answers in your English copy.

Day – 1 Monday

Q1. Write one- one page of hand writing in English and Hindi .

Q2. Write five lines on the topic – “My self”

Q3. Where did Sonu live?

Q4. Where did Monu live?

Q5. What did Lalu eat one day ?

Q6. Who am I ?

I make furniture.

I fly an aeroplane.

I repair shoes.

I sing songs.

I treat sick people.

Q7. Write a or an .

\_\_\_\_\_ car. \_\_\_\_\_ Umbrella \_\_\_\_\_ tree.

\_\_\_\_\_ apple. \_\_\_\_\_ ox.

Q8. Write opposite words.

Short Good Night Happy Young

Q9. Write **there is** and **there are**.

1. \_\_\_\_\_ also many lions.
2. \_\_\_\_\_ a big pond in the zoo.
3. \_\_\_\_\_ many people at the zoo.
4. \_\_\_\_\_ many baby lions too.
5. \_\_\_\_\_ a peacock under the tree.

Day – 2 Tuesday

Q1. Write one – one page of hand writing in English and Hindi.

Q2. Use of have and has

I We She  
They You He

Q3. Write two – two rhyming words.

Cat Frog Car  
Hair Tall

Q4. Can you bathe yourself?

Q5. How do you dry yourself?

Q6. How many pigs were there?

Q7. Underline the describing words. I heard a loud noise.

Shelia has a big balloon.

The elephant is a strong animal.

Q8. Write five lines on “ My mother “.

### Day – 3 Wednesday

Q1. Write one – one page of handwriting in English and hindi.

Q2. Do you share your things?

Q3. What did the little bird eat?

Q4. Who was Sundari?

Q5. Complete the sentences with am, is, or are.

I \_\_\_\_\_ sitting on the grass.

Nitin \_\_\_\_\_ trying to catch Diya.

We \_\_\_\_\_ happy

Q6. Write five lines on “ My favourite flower “.

Q7. Write **there is** and **there are**.

\_\_\_\_\_ also many lions.

\_\_\_\_\_ a big pond in the zoo.

\_\_\_\_\_ many people at the zoo.

### Day – 4 Thursday

Q1. Write one – one page of hand writing in English and hindi daily.

Q2. Where do the fish live?

Q3. Who liked yellow things?

Q4. Name the chicks in the story?

Q5. Write five lines on “ My school “.

Q6. Write the plural form of these sentences.

This is a train.

That is a clock.

This is a shop.

Q7. Write the ‘ ook ‘ Words ( example book) any five words.

### Day – 5 Friday

Q1. Write one – one page of hand writing in English and hindi.

Q2. Write five lines on “ My best friend “.

Q3. Do you like green mangoes? Why? Q4. Have you seen a merry - go- round?

Q5. Write the ‘ ool' words . ( example cool )any five words.

Q6. Circle the right words.

This / These is the classroom.

That / these are toys.

That / those are books.

Q7. Change the gender ( Male to female):      Boy                  Uncle                  Brother                  Lion

**Mount Litera Zee School, Hajipur|Sonpur**

**Worksheet- 1**

**Grade – 1**

**Sub – EVS**

**Day 1 Topic: My family.**

Q. Self Introduction.

1. What is your name?
2. How old are you?
3. Are you a boy or girl?
4. Which city do you live?
5. Which country do you live?
6. Which class do you read?
7. What is the name of your school?
8. What you want to become in life?
9. What do you like the most?
10. What do you dislike the most?

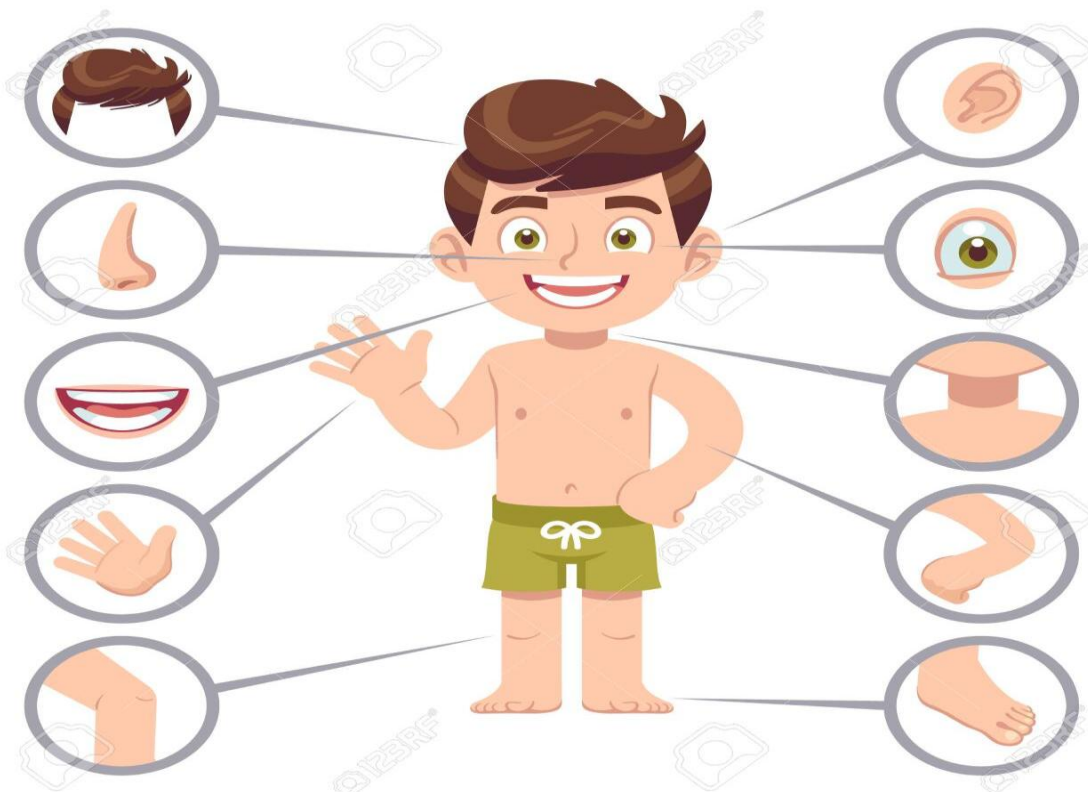
**Day 2**

- Q.1 Write five lines on your family.
- Q.2 Mention five things you enjoy doing with your family.
- Q.3 What is a small family?
- Q.4 What is a joint family?
- Q.5 What is your father's name?
- Q.6 What is your mother's name?
- Q.7 How many brother/sister do you have?



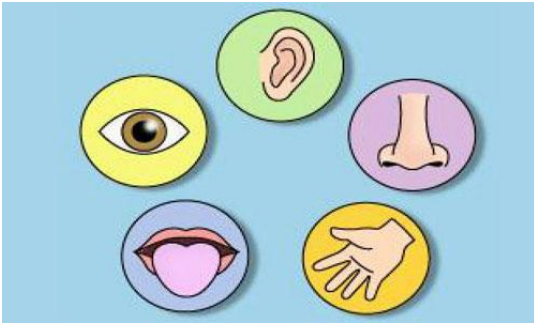
**Day 3 Topic: Body parts**

- Q.1 Write ten body parts name.
- Q.2 Identify and write the name of given body parts.





Q.3 See the picture and name the sense organs.



Q.4 Name the body part you will use to do these works.

See                  Hear                  Walk                  Catch                  Write                  Smile

Taste                  Touch                  Smell

Q.5 Rearrange the letters to find the name of parts of body.

REA                  GEL                  YEES                  AHND                  OENS

Q.6 Name the things you use to clean your body.

Q.7 Write five habits to keep body clean.

### Day 4 Topic: Our neighbourhood

Q.1 What do you understand by neighbourhood?

Q.2 Identify the pictures given below and name them.





- Q.3 Where do you go to buy fruits and vegetables?
- Q.4 Where do you go when you fall sick?
- Q.5 What do we do in playground?
- Q.6 Name five things you get in your neighbourhood market.
- Q.7 Where will you go to post letters?
- Q.8 Where does your parents keep their money?

**Day 5 Topic: My school**

- Q.1 What is the name of your school?
- Q.2 How many classrooms are there in your school?
- Q.3 Who is the head of the school?
- Q.4 Who teaches you in the school?
- Q.5 Who takes you to the school?
- Q.6 Name the rooms in your school.
- Q.7 What is the name of your class teacher?
- Q.8 Which is your favourite subject?
- Q.9 What is the name of your principal?
- Q.10 Which room is your favorite in the school?

**Worksheet- 1**

**Grade – 1**

**Sub – Mathematics**

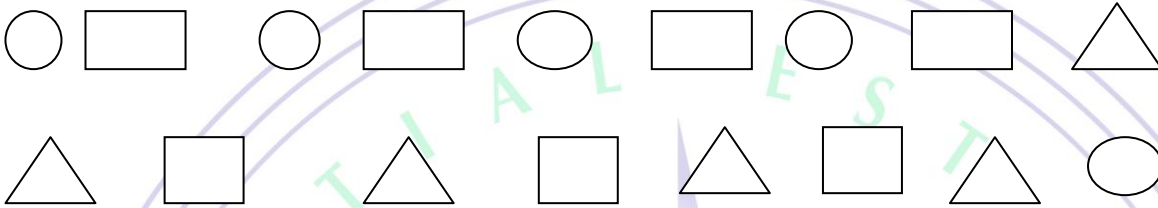
**Day 1 Topic: Shapes**

Q. Write and learn table 2 to 10

Q.1 Draw the shapes.

Triangle, rectangle, square, circle, cone, cylinder, semi-circle.

Q.2 Count the shapes and write.



- a. Square
- b. Rectangle
- c. Circle
- d. Triangle

Q.3 Which shape have four equal sides?

Q.4 Which shape have no corner?

Q.5 Name the shape that have three corners.

Q.6 Give one-one example of each.

Square                  Triangle                  Rectangle                  Circle  
Cone                      Semi-circle

Q.7 Name the shapes.



**Day 2 Topic: Number name**

Q.1 Write the number names.

45                      56                      20                      12                      30

Q.2 What comes after, before, between.

12 \_\_\_                  45 \_\_\_ 47                  \_\_\_ 30                  49 \_\_\_                  69 \_\_\_ 71  
\_\_\_ 100                  39 \_\_\_                  15 \_\_\_ 17                  \_\_\_ 50

Q.3 Put correct sign <, >, or =

42 \_\_\_ 24                  95 \_\_\_ 99                  88 \_\_\_ 88                  53 \_\_\_ 45                  26 \_\_\_ 26                  72 \_\_\_ 27

Q.4 Arrange the numbers smallest to biggest.

- a. 16, 20, 9, 23
- b. 32, 12, 25, 2
- c. 5, 72, 21, 8

Q.5 Arrange the numbers biggest to smallest.

a. 43, 15, 22, 6

b. 28, 65, 10, 31

c. 42, 24, 56, 65

Q. Write and learn table 2 to 10

**Day3**

Q. Solve these sums.

$23+12$

$56 - 42$

$25+52$

$68 - 21$

$85+12$

$64 - 32$

$99+1$

$88 - 88$

$62+8$

$89 - 17$

$64+15$

$54+62$

Q. Write and learn table 2 to 10

**Day 4**

1. You have 7 balloons and your friend has 5 balloons. How many more balloons do you have than your friends?

2. You have 9 cookies and you ate 2 of them. How many cookies do you have left?

3. A bee has 6 legs. How many legs does 2 bees have?

A shop has 98 toys. 35 are sold. How many are left?

4. Ravi had 5 books. Father gave him 3 more. How many books does Ravi have in all?

5. 4 birds are sitting on a branch. 1 flies away. How many birds are left on the branch?

6. There are 5 flowers and 3 bees. How many less bees than flowers?

7. There are 6 birds and 3 nests. How many more birds are there than the nests?

8. Write and learn table 2 to 10

**Day5**

Q. Write and learn table 2 to 10.

Mount Litera  
Zee School