

Write all the answers in English copy.

Lesson – 1 Title- Haldi's Adventure

Q1. How did she reach school ?

Q2. What does Haldi do in school ?

Q3. Who was smiley ?

Q4. Where was Haldi going?

Q5. On which days did Haldi go to school ?

Q6. True and False

1. Haldi was going to the park.

2. Smiley wore spectacles.

3. Smiley did not help Haldi reach school on time.

Q7. Write the meaning of the keywords.

1. Adventure

2. Surprised

3. Wonderful

Q8. Write five lines on 'A day at the Zoo'.

Q9. How do you go to school?

Q10. What do you wear to school?

**Mount Litera
Zee School**

हस्तलेख लिखें (Handwriting per day 1page)

१.कविता को ध्यान से पढ़े और रिक्त स्थानों की पूर्ति करें :-

(क) इतना ऊँचा _____ चला |

(ख) ऊँची गर्दन ऊँची _____ |

(ग) _____ ऊँट को ढोने दो |

(घ) _____ में भी ऊँट चला |

२. निम्नलिखित हर प्रश्न का उत्तर एक वाक्य में लिखें :-

(क) ऊँट ज्यादा कहाँ मिलते हैं ?

(ख) बालू या रेत कहाँ - कहाँ पर मिलती है ?

(ग) बालू में कौन चला ?

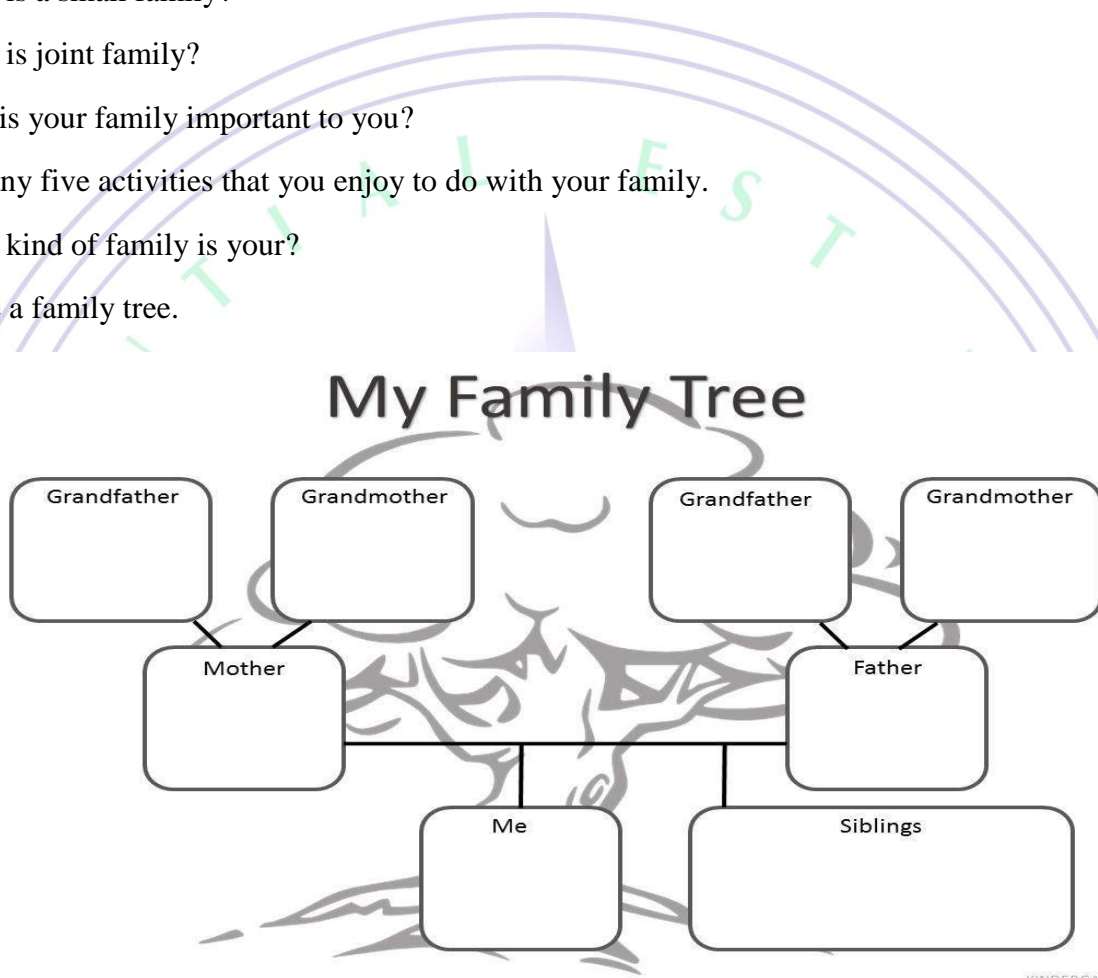
(घ) तुम्हारे आसपास कौन - कौन बोझ उठाते हैं ?

(ङ) ऊँट कैसे चलने लगा ?

(च) इस कविता में कुल कितनी बार ऊँट शब्द आया है ?











Chapter 1: My Family

- Q.1 Introduce yourself and your family.
- Q.2 What is a small family?
- Q.3 What is joint family?
- Q.4 Why is your family important to you?
- Q.5 List any five activities that you enjoy to do with your family.
- Q.6 What kind of family is your?
- Q.7 Make a family tree.










KINDERGARTENPRINTABLES.COM

- Q.8 List hobbies of your family members.
- Q.9 Fill the missing letters.

	Au__t		Unc__e
	Mo__her		Fa __ her
	S __ster		Cous__n
	G.__ather		G.__ other
	S__n		Child__en

Q.10 Unscramble the jumbled words.

 risset _____	 heftar _____
 napgrad _____	 hortreb _____
 ethrom _____	 dangram _____



Q. Write and learn table from 2 to 10 everyday.

Chapter:1 Shapes Around Us

Q.1 Match the shape to its name.

circle

triangle

square

rectangle

oval

diamond

circle

diamond

triangle

rectangle

Q.2 Name the shapes which have four equal sides.

Q.3 Name two shapes which have no corners.

Q.4 How many sides does cylinder have?

Q.5 Draw any six shapes.

Q.6 Give one example of each shapes.

Square, rectangle, triangle, cube, cuboid, circle, cone, cylinder, sphere.

Q.7 What shape is your ruler?

Q.8 How many corners does a hexagon have?

Q.9 Solve the riddles.

1. I have 4 sides and 4 vertices, what am I?

2. I am round, what am I?

3. I have 3 sides, what am I?

4. I have 2 short sides and 2 long sides, what am I?

